

# Our Teachers Are Superheroes

## Addition and Subtraction



### Our Teachers Are Superheroes

1

Benji and Freya are helping to organise the stock cupboard. They have counted 103 pencils, 58 rubbers and 84 rulers.


How many items have they found so far?



### Our Teachers Are Superheroes

2

Miss Higgins marked 28 tests over the weekend. She left 4 tests to mark during Monday lunchtime. How many tests will she have marked in total?



### Our Teachers Are Superheroes

3

Mr Wilstead drinks 3 cups of tea on Monday, 4 cups of tea on Tuesday and 11 cups over the rest of the week. How many cups of tea does he drink in total?



### Our Teachers Are Superheroes

4

During a maths test, Benji calculates that  $349 - 57 = 292$ .  
Freya writes the answer 282.  
Who is correct?



twinkl.com

### Our Teachers Are Superheroes

5

Mr Jay has missed a number out whilst adding together the two classes' house point scores. Can you complete the calculation so the answer is correct?

$$\begin{array}{r} 232 \\ 17 + \\ \hline 389 \end{array}$$




twinkl.com

### Our Teachers Are Superheroes

6

The tombola raised £348 and the sweet stall raised £376. Which stall raised the most money and by how much?



twinkl.com

### Our Teachers Are Superheroes

7

Mr Wilstead had 29 year 4 children attend his cricket club on Tuesday. On Wednesday, 17 year 3 children attended. On Thursday, all 29 year 5 children were there. How many children attended last week altogether?



twinkl.com




Freya counted up the money raised from the bouncy castle. She calculated that £297 had been raised. However, it cost £55 to hire the bouncy castle. How much profit was actually raised?



Out of the 348 children in the school, only 297 children came to the school fair. How many children didn't attend?



Mr Jay is doing the register and notices that 4 children are absent out of the 29 in his class. Two children walk in late. How many children are present today?



The school dinner numbers for years 1 to 3 need to be added up and sent to the canteen. How many children are having school dinners today?

- Year 1 = 67
- Year 2 = 54
- Year 3 = 18



Mr Jay has a pile of 29 science books to mark.  
He leaves the classroom with 18 marked.  
How many does he have left to mark?



twinkl.com

## Our Teachers Are Superheroes Addition and Subtraction Answers

- $103 + 58 + 84 = 245$   
They have found 245 items so far.
- $28 + 4 = 32$   
Miss Higgins will have marked 32 tests.
- $3 + 4 + 11 = 18$   
He drinks 18 cups of tea.
- $349 - 57 = 292$   
Benji is correct.
- $389 - 232 = 157$   
The missing digit is 5.
- $376 - 348 = 28$   
The sweet stall raised £28 more.
- $17 + 29 + 29 = 75$   
75 children attended over the week.
- $297 - 55 = 242$   
£242 profit was made.
- $348 - 297 = 51$   
51 children didn't attend.
- $29 - 4 + 2 = 27$   
27 children were at school that day.
- $67 + 54 + 18 =$   
139 children are having school dinners.
- $29 - 18 = 11$   
Mr Jay has 11 science books left to mark.